



Doon Public School, Etah

Where Excellence is a Habit!

4th Mile stone, Opposite PAC, Kasganj Road, Etah - 207001 (U.P.)

Mob: 7617614470 Website: www.doonpublicschooltah.in, e-mail: doonpublicschooltah@gmail.com

Entrance Exam

CLASS: 6th

Session 2021-22

SYLLABUS AND SAMPLE PAPERS BOOKLET

Admission Sought in Class: 6th

(For Class 5th Passed students)

Maths	25 Marks	Time allotted 01 Hour 45 Min.
Science	25 Marks	
English	25 Marks	

Syllabus of Class 5 : Mathematics

S.N.	Chapter/Topic
1	Operation with Large Numbers
2	Test of Divisibility
3	Simple Interest
4	Time
5	HCF & LCM
6	Fractions
7	Perimeter, Area & Volume
8	Decimal
9	Percentage & Average
10	Ratio & Proportion
11	Profit & Loss
12	Metric Measures

Syllabus of Class 5 : Science

S.N.	Chapter/Topic
1	Plants increasing in numbers
2	Animals everywhere
3	Food and health
4	Safety and First Aid
5	Our skeletal system
6	Our nervous System
7	Rocks and Minerals
8	Soil erosion and Conservation
9	Our life supports
10	Force and energy
11	Our earth's natural satellite
12	Changes In our environment

Syllabus of Class 5 :English (Grammar)

S.N.	Chapter/Topic
1	Sentence
2	Noun
3	Gender
4	Singular and Plural
5	Tenses
6	Adjective
7	Verb
8	Adverb
9	Preposition
10	Conjunction
11	Synonyms

SECTION-A**I. TICK THE CORRECT OPTION (4)****Q1. Who was America's first astronaut?**

- a. Alan Shepard
- b. Edwin "Buzz" Aldrin
- c. Neil Armstrong
- d. Galileo

Q 2. The study of the stars and planets

- a. globe
- b. amount
- c. astronomy
- d. temperature

Q3. Which of the following has a fixed shape-

- a. Stone
- b. Smoke
- c. Air
- d. water

Q4. The first link in all food chains is

- a. herbivores.
- b. carnivores.
- c. plants.
- d. omnivores.

Q5. Impure water contains many disease-causing germs like those of

- a. Cholera
- b. Jaundice
- c. Dysentery
- d. All of these

Q6. The most readily available source of energy is

- a. Wind energy
- b. Solar energy
- c. Geothermal energy
- d. Water energy

Q7. Soil is mostly conserved by

- a. Afforestation
- b. Deforestation
- c. Making roads
- d. Overgrazing

Q7. Afforestation means

- a. Felling of trees
- b. Growing trees
- c. Overgrazing
- d. Making dams

Q8. This may lead to soil erosion

- a. Terrace farming



- b. Growing of cover crops
- c. Afforestation
- d. Deforestation

II. **FILL IN THE BLANKS (5)**

1. The green coloured pigment present in the leaves of green plants _____
2. Sea Food is a rich source of _____.
3. _____ helps in protecting our body against diseases.
4. Earth complete it one rotation in _____
5. Gases donot have fixed shape and_____.
6. Plant get nitrogen with the help of bacteriain the _____
7. There is no _____ force In space.
8. Simple machine changes the _____ of applied force.
9. The air we breathe out is called_____air.
10. Loss of water in the form of vapour through leaves is called _____

III. **MATCH THE COLUMNS- (3)**

Column A	Column B
Carbohydrates and fats	Protective food
Proteins	Causes loss of Vision
Vitamins and Mineral	energy-giving food.
Dietary fibres	Causes the disease called goitre.
Iodine deficiency	They help us in easy digestion of food.
Lack of vitamin A	Body-building food

IV. **TRUE OR FALSE- (2)**

1. Rabies is caused by severe burns._____.
2. The backbone protects the Spinal cord_____.
3. Femur is the bone of the lower leg_____.
4. Fish have gills to swim_____.
5. All insects have four legs_____.

SECTION-B

V. **VERY SHORT ANSWER TYPE QUESTIONS – (4)**

- (a) what are simple machines?
- (b) What is meant by afforestation ?
- (c).What is soil conservation?
- (d).Name four gases present in air?

VI **ANSWER THESE QUESTIONS- (3)**

- Q1. Why do animals need to move?
- Q2.What is a balanced diet?
- Q3. What is bone marrow?
- Q4. What is a reflex action?

SECTION-C

VII. **LONG ANSWER TYPE QUESTION- (4)**

- Q1.With the help of a lablled diagram explain the process of filtration?
- OR**

- Q1 What does the law of conservation of energy states?

1. **The successor of 99 is,**
 - (a) 101
 - (b) 100
 - (c) 98
 - (d) none of these.

2. **The number that multiplies is called,**
 - (a) multiplicand
 - (b) multiplier
 - (c) both (a) & (b)
 - (d) none of these

3. **The Smallest composite number is,**
 - (a) 1
 - (b) 2
 - (c) 3
 - (d) 4

4. **$\frac{1}{8}$ of a day is equal to,**
 - (a) 4 hours
 - (b) 3 hours
 - (c) 8 hours
 - (d) 2 hours

5. **$7.18 \times 10 =$ _____**
 - (a) 718
 - (b) 7180
 - (c) 71.8
 - (d) 0.718

6. **$2 - (-1) - 2 - (-3) =$**
 - (a) 0
 - (b) 3
 - (c) 2
 - (d) 4

7. **$2 + \frac{1}{100} =$ _____**
 - (a) 2.11




- (b) 2.1
- (c) 2.01
- (d) 2.001

8. Find the missing terms, 2 : 5 :: _____ : 15

- (a) 5
- (b) 6
- (c) 2
- (d) 15

9. The fraction representing the shaded portion is,

- (a) $\frac{1}{4}$
- (b) $\frac{1}{2}$
- (c) $\frac{3}{4}$
- (d) none of these



10. The difference between selling price and profit is _____,

- (a) Cost price
- (b) Selling Price
- (c) Overhead Price
- (d) Loss

11. 2 cm 9 mm = _____ mm

- (a) 209
- (b) 29
- (c) 290
- (d) none of these

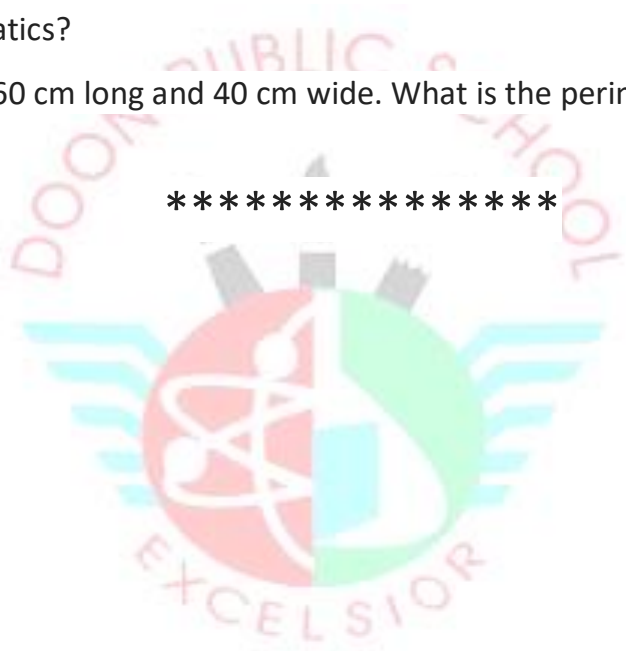
12. What time will be 5 hours 20 min before 1:30 pm ?

- (a) 8:10 am
- (b) 8:10 pm
- (c) 8:11 am
- (d) 8:11 pm

13. Write in decimal : $25 + \frac{3}{100} + \frac{6}{1000} =$ _____

14. The number of days from 5th May to 2nd June is _____

15. Convert 7 L 125 ml into Litre (L). _____
16. A mobile is sold at a loss of Rs. 1200. If the selling price is Rs. 3450, Find the cost price?
17. $\frac{4}{5}$ of the farmer grow wheat in their fields. What per cent of the farmers grow wheat?
18. Arrange in columns and add:
 $312.101 + 66.05 + 102.1842$
19. Fill in the blanks : [5]
- 1. Every twin primes are also _____
 - 2. _____ is the only even prime number.
 - 3. $9 - (-0) =$ _____
 - 4. A number is divisible by _____ if the last digit is either 0 or 5.
 - 5. Interest depends on principal, rate of interest and _____
20. Out of class of 50 students, 20 students performed in dramatics. What percentage of students did not participate in dramatics?
21. A rectangular carpet is 60 cm long and 40 cm wide. What is the perimeter of the carpet?



A. Look at the following sentences. Write 'A' for assertive, 'I' for Interrogative, 'E' for exclamatory and 'Im' for Imperative. (2)

1. Wow ! Today is Babita's birthday. _____
2. These flowers are colourful. _____
3. Why were you late to work? _____
4. Please sit down. _____

B. Circle the subjects and underline the predicates. (2)

1. I went to Great America.
2. Alok stayed up late doing his homework.
3. The Cheetah is the fastest land animal.
4. We play basketball every Tuesday.

C. Pick out the nouns in the following sentences and state their kinds. (2)

1. Jawaharlal Nehru was the first Prime Minister of India. _____
2. The elephant has great strength. _____
3. Dispur is the capital of Assam. _____
4. The jury was convinced of his innocence. _____

D. Change the following gender. (2)

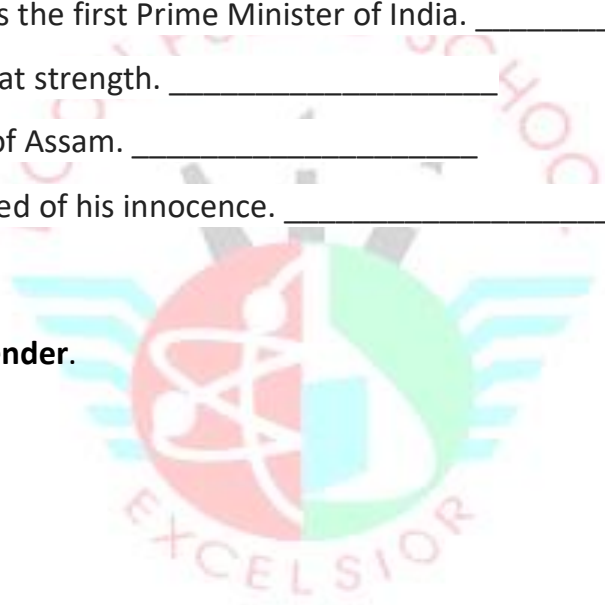
1. Tiger
2. Horse
3. Duke
4. Husband

E. Give plurals of the following.

1. Handkerchief
2. M.A.
3. Tooth
4. Lady

F. Fill in the blanks with the suitable types of adjectives given in the brackets.

1. Philip is an _____ man. (quality)
2. We did not take _____ book. (quantity).
3. _____ movie were you talking about? (Interrogative)
4. _____ mangoes are sweet to taste. (Demonstrative)



G. **Underline the verbs in the sentences and write whether they are transitive or intransitive.** (2)

1. Father is cooking dinner today.
2. We are fond of food.

H. **Convert the following sentences as directed.** (3)

1. Nisha knew my name. (Simple present)
2. Rohit feels sad. (Future continuous)
3. I have completed my homework. (Past perfect)

I. **Circle the action words in the following sentences.** (3)

1. I am playing ludo.
2. Fish is swimming in the aquarium.
3. Birds are flying in the sky.

J. **Select the appropriate word from the brackets after each sentence to fill in the blanks.** (2)

1. You must work _____ (seriously, already)
2. He looked _____ after changing his clothes. (pretty, better)
3. Ravi goes to the garden _____ (daily, already)
4. Ashish is _____ careless to pass the examination. (too, enough)

K. **Complete the following sentences using appropriate prepositions.** (2)

1. **Is your brother home?**

- a) in
- b) at
- c) on

2. **He is a man humble origin.**

- a) of
- b) with
- c) from

3. **The boy was beaten a stick.**

- a) by
- b) with
- c) Either could be used here

4. **John was punished his father.**

- a) with
- b) for
- c) by

L. Fill in the blanks using appropriate conjunctions. (2)

- 1. He is taller.....I am.
- 2. I read novels..... they are interesting.
- 3. I took bread..... butter for me.
- 4. He is poor..... honest.

M. Give synonyms. (1)

- 1. Pain
- 2. Small

